

Name: _____

Date: _____

Numicon Addition 0-10

Add the objects together and write the answers in the boxes.

$$\begin{array}{c} \text{1 square} \\ + \\ \text{2 rectangles} \\ = \end{array} \boxed{}$$

$$\begin{array}{c} \text{3 L-shaped} \\ + \\ \text{2 rectangles} \\ = \end{array} \boxed{}$$

$$\begin{array}{c} \text{5 2x2 grid} \\ + \\ \text{1 square} \\ = \end{array} \boxed{}$$

$$\begin{array}{c} \text{2 rectangles} \\ + \\ \text{2 rectangles} \\ = \end{array} \boxed{}$$

$$\begin{array}{c} \text{6 2x3 grid} \\ + \\ \text{1 square} \\ = \end{array} \boxed{}$$

$$\begin{array}{c} \text{1 square} \\ + \\ \text{6 2x3 grid} \\ = \end{array} \boxed{}$$

Name: _____

Date: _____

Numicon Addition 0-10

Add the objects together and write the answers in the boxes.

$$\begin{array}{|c|} \hline \text{7} \\ \hline \end{array} + \begin{array}{|c|} \hline \text{2} \\ \hline \end{array} = \square$$

$$\begin{array}{|c|} \hline \text{6} \\ \hline \end{array} + \begin{array}{|c|} \hline \text{4} \\ \hline \end{array} = \square$$

$$\begin{array}{|c|} \hline \text{1} \\ \hline \end{array} + \begin{array}{|c|} \hline \text{7} \\ \hline \end{array} = \square$$

$$\begin{array}{|c|} \hline \text{10} \\ \hline \end{array} + \begin{array}{|c|} \hline \text{0} \\ \hline \end{array} = \square$$

$$\begin{array}{|c|} \hline \text{4} \\ \hline \end{array} + \begin{array}{|c|} \hline \text{1} \\ \hline \end{array} = \square$$

$$\begin{array}{|c|} \hline \text{3} \\ \hline \end{array} + \begin{array}{|c|} \hline \text{2} \\ \hline \end{array} = \square$$




Name: _____

Date: _____



Numicon Addition 0-10



Add the objects together and write the answers in the boxes.

 + $+$ =

 + $+$  =

 + $+$  =

 + $+$  =

 + $+$  =

 + $+$  =

Name: _____

Date: _____

Numicon Addition 0-10

Add the objects together and write the answers in the boxes.

$$5 + 2 = \square$$

$$6 + 2 = \square$$

$$3 + 3 = \square$$

$$3 + 5 = \square$$

$$6 + 6 = \square$$

$$4 + 4 = \square$$

Name: _____

Date: _____

Numicon Addition 0-10

Add the objects together and write the answers in the boxes. Then make the number sentences below.

$$\text{1 square} + \text{2 rectangles} = \square$$

$$\text{3 L-shapes} + \text{2 rectangles} = \square$$

$$\text{5 L-shapes} + \text{1 square} = \square$$

$$\text{2 rectangles} + \text{2 rectangles} = \square$$

$$\text{6 circles} + \text{1 square} = \square$$

$$\text{1 square} + \text{6 circles} = \square$$

Name: _____



Date: _____


Numicon Addition 0-10

Add the objects together and write the answers in the boxes. Then make the number sentences below.

 $+$  $=$

 $+$  $=$

 $+$  $=$

 $+$ $=$

 $+$  $=$

 $+$  $=$

Name: _____

Date: _____



Numicon Addition 0-10



Add the objects together and write the answers in the boxes. Then make the number sentences below.

 $+$ $=$

 $+$  $=$

 $+$  $=$

 $+$  $=$

 $+$  $=$

 $+$  $=$

Name: _____



Date: _____

Numicon Addition 0-10

Add the objects together and write the answers in the boxes. Then make the number sentences below.



 +  =

 +  =

 +  =

 +  =

 + =

 +  =