



Name: \_\_\_\_\_

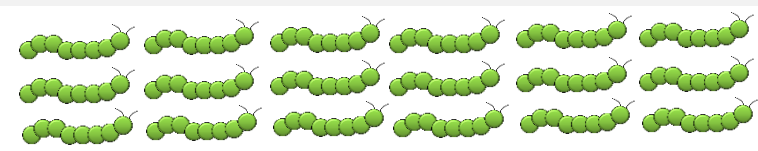
Date: \_\_\_\_\_


## Minibeasts Subtraction 0-20

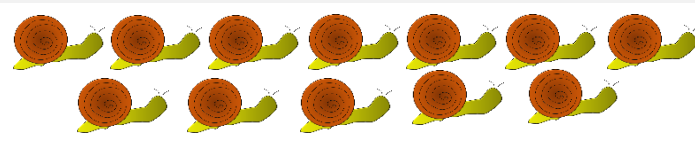
Cross off the minibeasts and write the answers in the boxes.

  $10 - 5 = 7 = \square$


  $15 - 4 = 11 = \square$

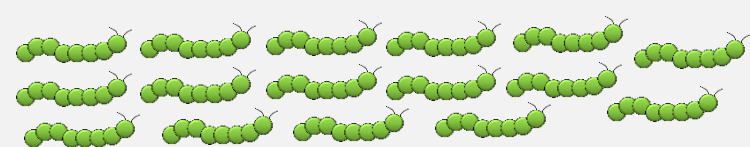
  $16 - 8 = 8 = \square$

  $18 - 6 = 12 = \square$

  $11 - 2 = 9 = \square$

  $13 - 3 = 10 = \square$

  $12 - 7 = 5 = \square$

  $14 - 10 = 4 = \square$

  $16 - 3 = 13 = \square$

  $10 - 7 = 3 = \square$

Name: \_\_\_\_\_

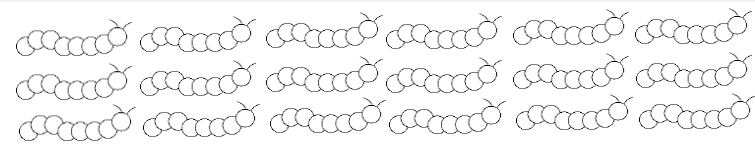
Date: \_\_\_\_\_


## Minibeasts Subtraction 0-20

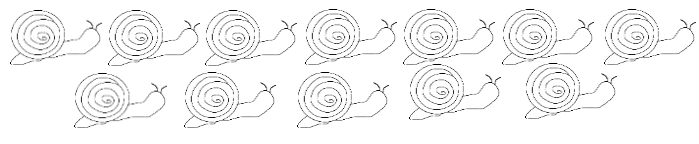
Cross off the minibeasts and write the answers in the boxes.

 - 7 =

 - 11 =

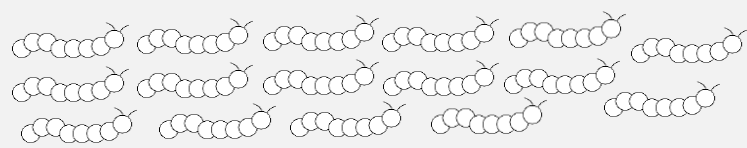
 - 8 =

 - 12 =

 - 9 =

 - 10 =

 - 5 =

 - 4 =

 - 13 =

 - 3 =